



Printed Pages : 4

ME – 202

(Following Paper ID and Roll No. to be filled in your Answer Book)

PAPER ID : 4035

Roll No.

--	--	--	--	--	--	--	--	--	--

B. Tech.

(SEM. II) EXAMINATION, 2006-07

ENGINEERING MECHANICS

Time : 2 Hours]

[Total Marks : 50

- Note : (i) Attempt *all* questions.
(ii) Assume missing data suitably, if any.

1 Attempt any **four** of the following : **3.5×4=14**

- (a) Explain the law of transmissibility of forces.
- (b) A particle is acted by following forces.
 - (1) 200 N inclined 30° with east towards north
 - (2) 250 N towards the north
 - (3) 300 N towards the north west
 - (4) 350 N inclined at 40° with west towards south

Find the resultant of all forces and its direction.

- (c) Four forces equal to P, 2P, 3P and 4P are acting along the four sides of a square ABCD as shown in figure. Find the magnitude, direction and position of resultant forces.

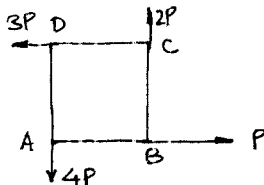


Fig. 1

- (d) A smooth circular cylinder of radius 2 m is lying in a triangular groove, one side of which makes 20° and other side makes 40° angle with the horizontal. Find the reaction at the surfaces of contact, if there is no friction and the cylinder weighs 2 kN.

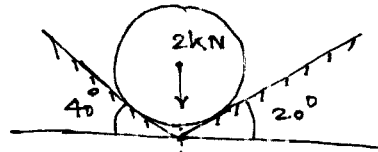


Fig. 2

- (e) Briefly explain the Varignon's Principle.
- (f) Draw the bending moment diagram of the cantilever beam shown in the figure.




Fig. 3

2 Attempt any **four** of the following : **3×4=12**

- (a) Differentiate between an imperfect truss, perfect truss and redundant truss.
- (b) For the given truss find the forces in members BC, CD and BD.

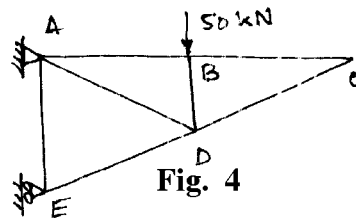


Fig. 4

- (c) Find the centroid of a uniform wire bent in form of a quadrant of the arc of a circle of radius R.
- (d) State the parallel axis theorem.
- (e) What is product of inertia ? What will the product of inertia of a circular disc about its centroidal axis ?
- (f) Find the second moment of area of the given L-section about the centroidal x axis as shown in **Fig.5**

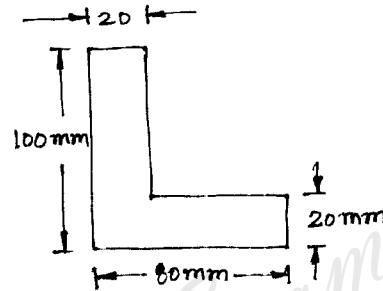


Fig. 5

- 3** Attempt any **two** of the following : **6×2=12**
- (a) The pitch of a single thread screw jack is 6 mm and its mean diameter is 60 mm. If the coefficient of friction is 0.1, determine the force required at the end of a 250 mm long lever from the axis of the screw to (i) raise a load of 48 kN (ii) lower the same load. Is the screw self locking?
 - (b) A belt is running over a pulley of diameter 1000 mm at 450 rpm. The angle of contact is 150° and the coefficient of friction is 0.35. If the maximum tension in the belt is limited to 1 kN, determine the power transmitted by it.
 - (c) A car weighing 4 kN is moving at a speed of 200 m/s. The resistance to the car is largely due to the air drag which is equal to $0.005 v^2$. What distance will it travel before its speed is reduced to 100 m/s ?

4 Attempt any **two** of the following : **6×2=12**

- (a) A cylinder of radius 80 mm rolls without slipping along a horizontal plane AB. Its center has a uniform velocity of 15 m/s. Find the velocities of points D and E on the rim of the cylinder.

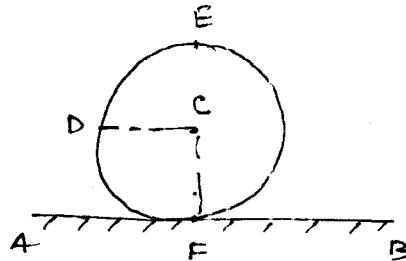


Fig. 6

- (b) State the D'Alembert's principle. A lift has an upward acceleration of 2.5 m/s^2 . What pressure will a man of weight 800 N exert on the floor of the lift ? Determine the pressure by him if the acceleration of lift is 2.5 m/s^2 downwards. Assume $g = 9.8 \text{ m/s}^2$.
- (c) With suitable examples explain the difference between conservative and non-conservative forces. An object weighing 100 N is pulled up by a 80 N force up an inclined smooth plane as shown in Fig.7. Determine the velocity of the object after it has moved 4 m.

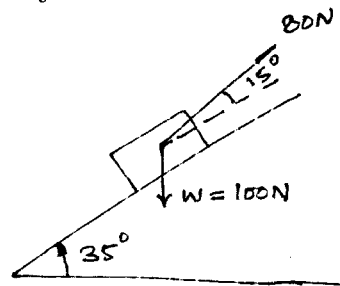


Fig. 7